


Triangles



Look at these different triangles.




Equilateral
All sides equal,
all angles equal.








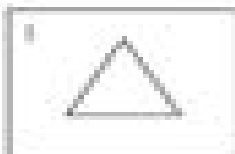
Isosceles
Two sides equal.



Scalene
All sides different.



Right angle
Among the collection of
triangles, this one stands
out for a right angle.



List the triangles that are:

Equilateral _____

Isosceles _____

Scalene _____

Right angle _____