


Triangles



Look at these different triangles.




Equilateral
all sides equal,
all angles equal







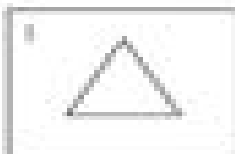
Isosceles
two sides equal



Scalene
all sides different



Right angle
having the combination of
sides, two sides equal
form the a right angle



List the triangles that are:

Equilateral _____

Isosceles _____

Scalene _____

Right angle _____