

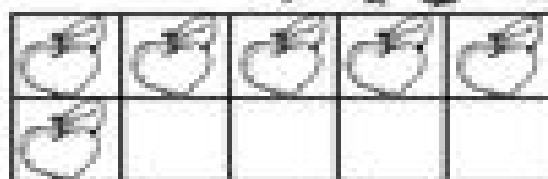
Name \_\_\_\_\_

# Let's Make 10!


Directions: Complete the ten frame to make 10.  
Write the number sentence.



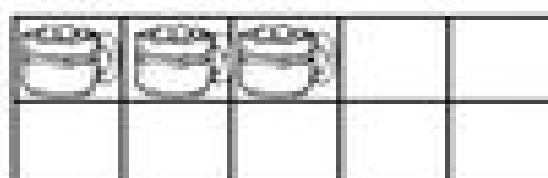
\_\_\_\_\_ + \_\_\_\_\_ = 10



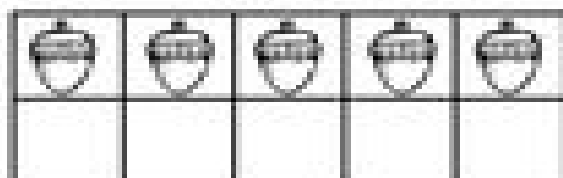
\_\_\_\_\_ + \_\_\_\_\_ = 10



\_\_\_\_\_ + \_\_\_\_\_ = 10



\_\_\_\_\_ + \_\_\_\_\_ = 10



\_\_\_\_\_ + \_\_\_\_\_ = 10



\_\_\_\_\_ + \_\_\_\_\_ = 10