


Goal - I can identify and draw lines of symmetry on 2D shapes.
I can sketch the reflection of a shape in a mirror line.

Lines of Symmetry


How many lines of symmetry does each shape have?




Lines of symmetry _____




Lines of symmetry _____




Lines of symmetry _____



Lines of symmetry _____



Lines of symmetry _____



Lines of symmetry _____

Draw the reflection of each shape on the other side of the dashed mirror line.

