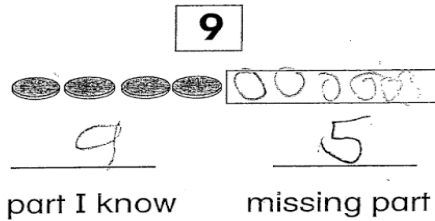


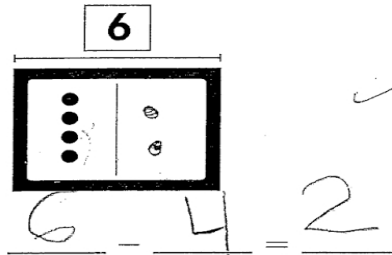
Name _____

5. Find the missing part.
Write the numbers.




Complete the picture.
Write a subtraction sentence.

6. Jennifer has 6 guitar picks.
She gives 4 guitar picks to
her students. How many
guitar picks are left?

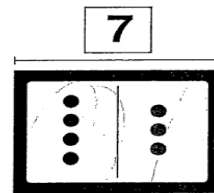


7. Draw the missing counters.
Write the numbers.



$8 - \underline{4} = \underline{4}$
 $4 + \underline{8} = \underline{6}$

8. Circle the number
sentence that is true.



$7 = 4 - 3$ $4 = 7 - 3$
 $3 - 4 = 7$ $7 - 3 = 5$

9. Write a subtraction story for $8 - \underline{\quad} = 2$. Draw a picture.

