





**INSTRUCTIONS FOR COMPLETING
"CHICKEN BASKET" WORKSHEETS**

- A** Using the "Chicken Basket" menu order board, find the price of each food item on the worksheet.
- B** Write the price of each food item on the worksheet on the blank line to the right of its picture.
- C** Do the math and write the answer by the \$ sign at the bottom of the problem.

Chicken Basket											
CHICKEN				SANDWICHES				PIZZAS			
 4.59	 3.99	 3.29	 2.59	 3.99	 3.49	 3.99	 3.99	 7.99	 8.99	 9.99	 10.99
FAMILY SIZE ORDERS											
DRINKS											
DESSERTS											

Name _____ Date _____

A Fill in the price of each food item. **B** Add the food prices together to find the total cost of the meal.

Chicken Basket		
<input type="checkbox"/> 4-Piece Thighs & Legs Dinner		\$ 4.59 B
<input checked="" type="checkbox"/> 3-Piece Thighs & Legs Dinner		.89 B
<input type="checkbox"/> French Fries		1.00 B
<input type="checkbox"/> Pudding		+ .90 B
TOTAL		\$ 7.38 C