








Tens and ones

How many tens and ones do you see?

tens	ones	tens	ones	tens	ones
					
1	4				

14

Draw the tens and ones.

tens	ones	tens	ones	tens	ones
1	9	1	5		3

19