

Third Grade Morning Work

Name: _____

Date: _____

Circle the true expressions!

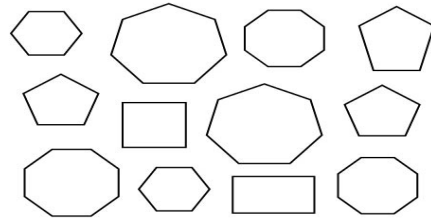
$$6781 < 8725$$

$$1092 > 2938$$



$$9826 < 6289$$

$$5461 > 7245$$

Circle the pentagon below!



What time do these clocks show?



Write the number!

- 1) Sixty-eight _____
- 2) Thirty-four _____
- 3) Ninety _____
- 4) Twenty-three _____
- 5) Forty-nine _____

There are 457 people at the baseball game. Ninety-one people leave the game. Thirty-two people join the game.

How many people are left at the baseball game?