







Name: _____

Wednesday

Math Practice: Recognize and draw shapes (2.G.1)

Name the shape.

 _____ Number of sides: _____ Number of angles: _____ Objects I have seen:	 _____ Number of sides: _____ Number of angles: _____ Objects I have seen:	 _____ Number of sides: _____ Number of angles: _____ Objects I have seen:
 _____ Number of sides: _____ Number of angles: _____ Objects I have seen:	 _____ Number of sides: _____ Number of angles: _____ Objects I have seen:	 _____ Number of sides: _____ Number of angles: _____ Objects I have seen: