






Name _____

Period _____

Identify That Rock – Complete the table.

Picture	Rock Name	Rock Group	Formation
 <p>1. This is a rock with a dark crystalline texture.</p>	<p>Choose the correct rock name:</p> <p>A. Basalt B. Granite C. Limestone D. Gneiss E. Conglomerate</p>	<p>Choose igneous, Metamorphic or Sedimentary</p>	<p>Show the rock group from:</p>
 <p>2. This is a rock with wavy layers.</p>	<p>Choose the correct rock name:</p> <p>A. Basalt B. Granite C. Limestone D. Gneiss E. Conglomerate</p>		
 <p>3. This is a light-colored crystalline rock.</p>	<p>Choose the correct rock name:</p> <p>A. Basalt B. Granite C. Limestone D. Gneiss E. Conglomerate</p>		
 <p>4. This is a light-colored crystalline rock.</p>	<p>Choose the correct rock name:</p> <p>A. Basalt B. Granite C. Limestone D. Gneiss E. Conglomerate</p>		
 <p>5. This is a light-colored crystalline rock.</p>	<p>Choose the correct rock name:</p> <p>A. Basalt B. Granite C. Limestone D. Gneiss E. Conglomerate</p>		