

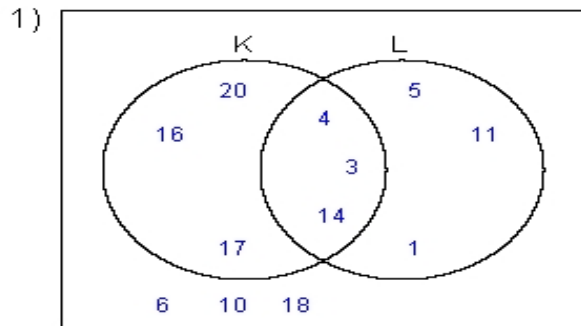
Name : \_\_\_\_\_

Score : \_\_\_\_\_

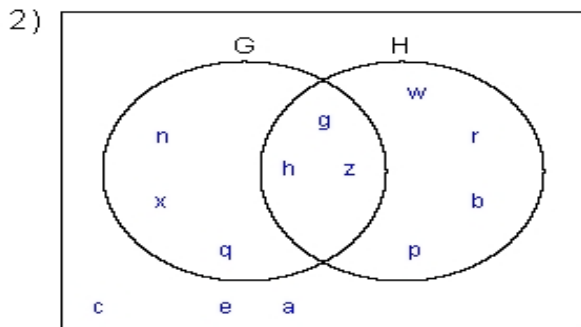
Teacher : \_\_\_\_\_

Date : \_\_\_\_\_

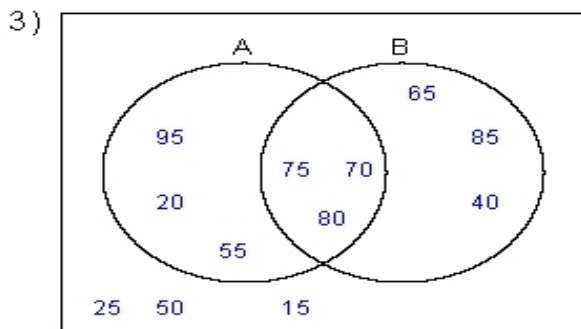
**Solve the Problems Using the Venn Diagrams**



$K' \cap L'$  = \_\_\_\_\_  
 $L - K'$  = \_\_\_\_\_  
 $L - K$  = \_\_\_\_\_  
 $K$  = \_\_\_\_\_



$G \cap H$  = \_\_\_\_\_  
 $G' \cap H'$  = \_\_\_\_\_  
 $H' - G'$  = \_\_\_\_\_  
 $(G - H)'$  = \_\_\_\_\_



$A \cup B$  = \_\_\_\_\_  
 $B'$  = \_\_\_\_\_  
 $B - A$  = \_\_\_\_\_  
 $A' \cup B'$  = \_\_\_\_\_