

Score

6

02-01-03-007-s

Name: \_\_\_\_\_  
Date: \_\_\_\_\_

Subject: Year 2 Numeracy  
Unit: 3-D shapes

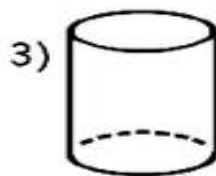
Name the following 3-D shapes:



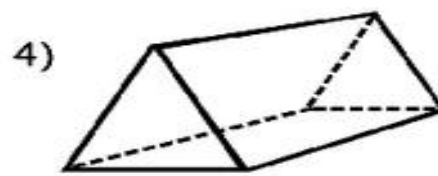
\_\_\_\_\_



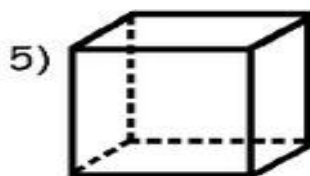
\_\_\_\_\_




\_\_\_\_\_



\_\_\_\_\_



\_\_\_\_\_



\_\_\_\_\_