

Answer Key!

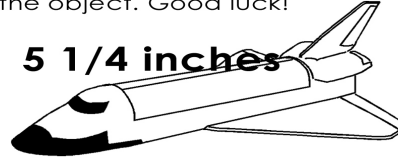
Name \_\_\_\_\_

# HOW LONG IS IT?

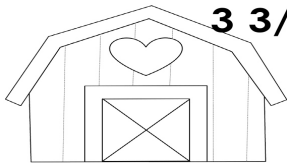
Use the rulers to measure each object to the nearest 1/4 inch. Mark your answer on the ruler and write it next to the object. Good luck!



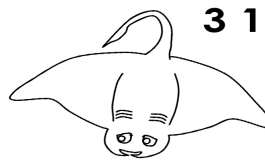
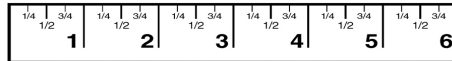
1 3/4 inches



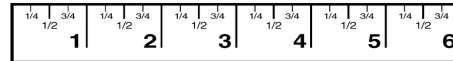
5 1/4 inches



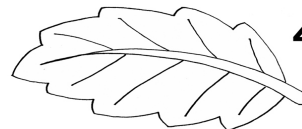
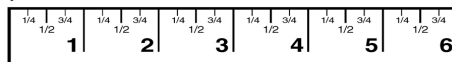
3 3/4 inches




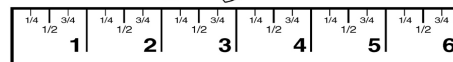
3 1/2 inches



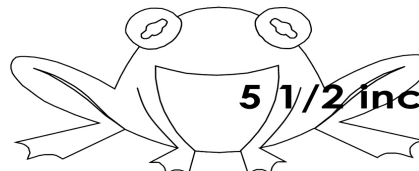
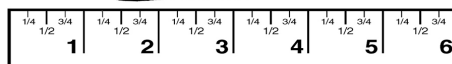
2 3/4 inches



4 inches



4 1/4 inches



5 1/2 inches

