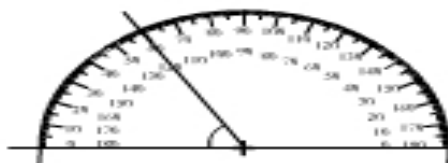


Print

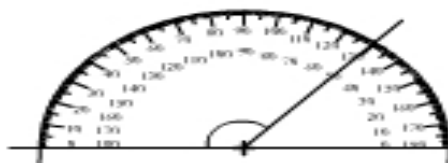
Measuring angles using a protractor

Measure and name each angle



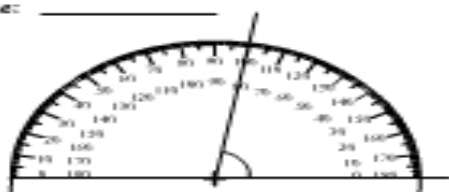
measurement: _____

name: _____



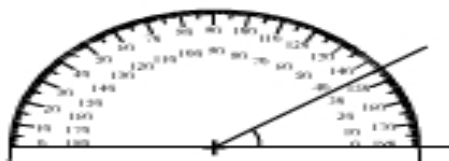
measurement: _____

name: _____



measurement: _____

name: _____



measurement: _____

name: _____


Constructing angles using a protractor

Draw each angle

A 70° angle



A 130° angle



A 165° angle



A 35° angle

