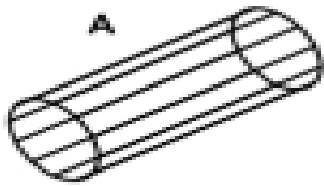
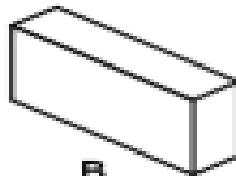


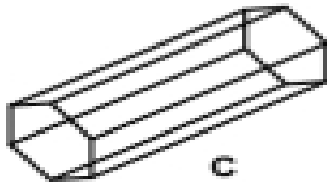
Can you identify each of these 3-D shapes? Join the shape to the name.



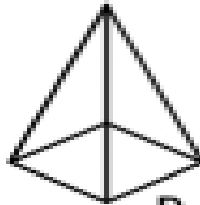
A



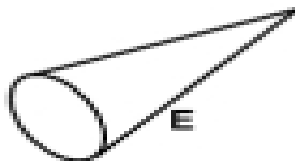
B



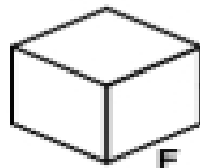
C



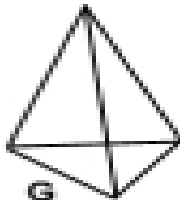
D



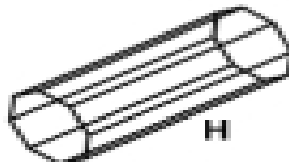
E



F



G



H

Cube

Cuboid

Square based  
Pyramid

Cone

Cylinder

Tetrahedron

Octagonal Prism

Hexagonal Prism