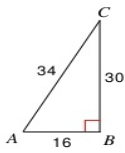


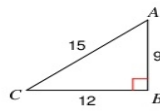
Finding Trigonometric Ratios

Find the value of each trigonometric ratio to the nearest ten-thousandth.

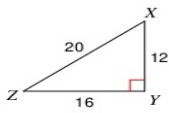
1) $\tan A$



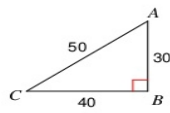
2) $\cos C$



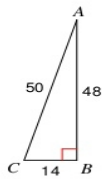
3) $\sin Z$



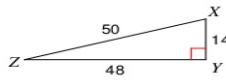
4) $\sin C$



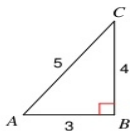
5) $\sin C$



6) $\sin Z$



7) $\cos A$



8) $\cos X$

