







Name: \_\_\_\_\_



**Pictures Addition With Sum to 10.**



Count, sum and write the correct answer in the box.



	+		=	<input type="text" value="4"/>
---	---	--	---	--------------------------------

	+		=	<input type="text"/>
---	---	--	---	----------------------

	+		=	<input type="text"/>
---	---	--	---	----------------------

	+		=	<input type="text"/>
---	---	--	---	----------------------

	+		=	<input type="text"/>
---	---	--	---	----------------------

	+		=	<input type="text"/>
---	---	--	---	----------------------