




























## Halloween Math Maze

Worksheet 1

Solve the addition problems. Color all of the ghosts that have an even numbered sum to find a path to the haunted house.

 $\begin{array}{r} 3 \\ +3 \\ \hline \end{array}$	 $\begin{array}{r} 25 \\ +11 \\ \hline \end{array}$	 $\begin{array}{r} 47 \\ +41 \\ \hline \end{array}$	 $\begin{array}{r} 35 \\ +13 \\ \hline \end{array}$	 $\begin{array}{r} 41 \\ +26 \\ \hline \end{array}$	 $\begin{array}{r} 14 \\ +23 \\ \hline \end{array}$
 $\begin{array}{r} 22 \\ +31 \\ \hline \end{array}$	 $\begin{array}{r} 45 \\ +14 \\ \hline \end{array}$	 $\begin{array}{r} 7 \\ +2 \\ \hline \end{array}$	 $\begin{array}{r} 9 \\ +9 \\ \hline \end{array}$	 $\begin{array}{r} 13 \\ +42 \\ \hline \end{array}$	 $\begin{array}{r} 15 \\ +6 \\ \hline \end{array}$
 $\begin{array}{r} 44 \\ +22 \\ \hline \end{array}$	 $\begin{array}{r} 52 \\ +24 \\ \hline \end{array}$	 $\begin{array}{r} 22 \\ +36 \\ \hline \end{array}$	 $\begin{array}{r} 41 \\ +31 \\ \hline \end{array}$	 $\begin{array}{r} 11 \\ +46 \\ \hline \end{array}$	 $\begin{array}{r} 71 \\ +10 \\ \hline \end{array}$
 $\begin{array}{r} 66 \\ +12 \\ \hline \end{array}$	 $\begin{array}{r} 14 \\ +33 \\ \hline \end{array}$	 $\begin{array}{r} 7 \\ +8 \\ \hline \end{array}$	 $\begin{array}{r} 27 \\ +62 \\ \hline \end{array}$		
 $\begin{array}{r} 88 \\ +10 \\ \hline \end{array}$	 $\begin{array}{r} 45 \\ +31 \\ \hline \end{array}$	 $\begin{array}{r} 15 \\ +51 \\ \hline \end{array}$	 $\begin{array}{r} 33 \\ +45 \\ \hline \end{array}$		