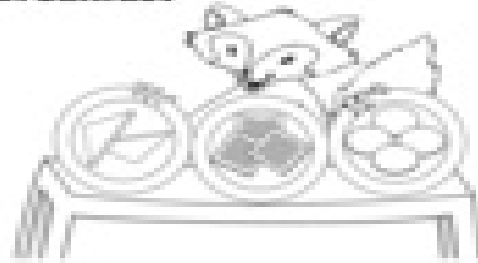

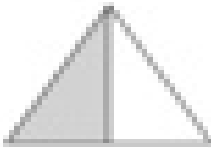

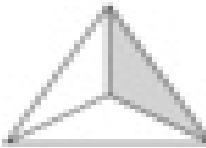






Name: \_\_\_\_\_ Identifying parts of a whole

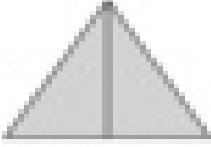
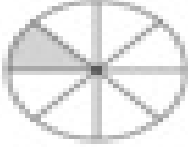


### Fractions for Breakfast

What amount of each did Frankie eat?  
Look at each shaded part.  
Write the fraction.



A.      
\_\_\_\_\_  $\frac{1}{4}$  \_\_\_\_\_ \_\_\_\_\_ \_\_\_\_\_

B.      
\_\_\_\_\_ \_\_\_\_\_ \_\_\_\_\_ \_\_\_\_\_

C.      
\_\_\_\_\_ \_\_\_\_\_ \_\_\_\_\_ \_\_\_\_\_