


Name: _____

Equal Parts

Directions: For each shape, divide into the equal parts given. Shade a portion and write the fraction shaded.


4 equal parts



I shaded _____

of the shape.


5 equal parts



I shaded _____

of the shape.

8 equal parts



I shaded _____

of the shape.


8 equal parts



I shaded _____

of the shape.


10 equal parts



I shaded _____

of the shape.

12 equal parts



I shaded _____

of the shape.