

# Digital clocks



Write the times under the clocks.




half past 12




Fill in the digital times on the clock faces.



half past 11




half past 1




12 o'clock



half past 3



8 o'clock



10 o'clock