

Name: _____

CCSS 1.MD.A.2

Measurement

TOP SECRET agents




Cut out the magnifying glasses below and use them to measure the length of each secret agent tool.

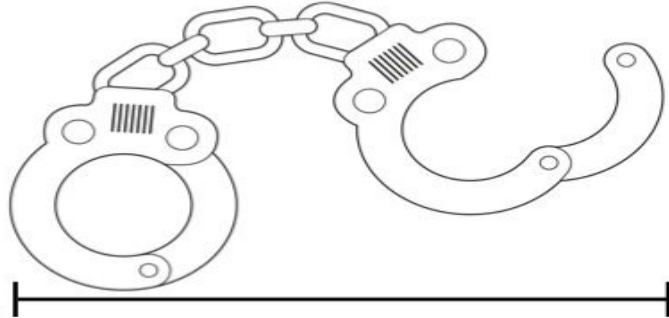
1. _____ magnifying glasses



2. _____ magnifying glasses




3. _____ magnifying glasses



4. _____ magnifying glasses

5. _____ magnifying glasses



6. _____ magnifying glasses

