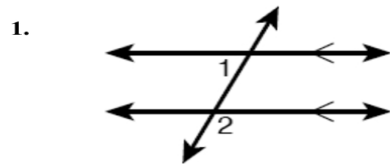




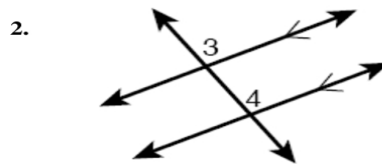
Geometry Chapter 3 Section 2 Worksheet I
Como Park Senior High School

Name _____ Period _____ Due Date: _____

Determine whether each pair of angles is congruent according to the Corresponding Angles Postulate.

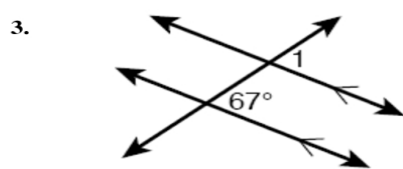


$\angle 1$ and $\angle 2$ _____

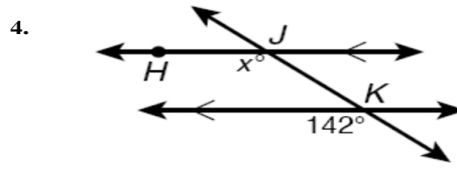


$\angle 3$ and $\angle 4$ _____

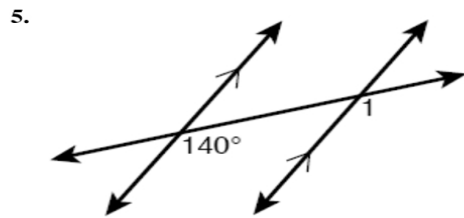
Find each angle measure.



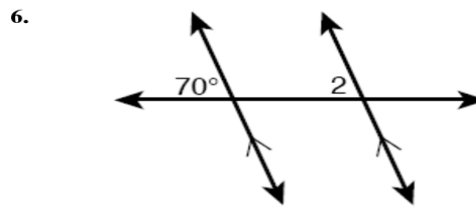
$m\angle 1 =$ _____



$m\angle HJK =$ _____



$m\angle 1 =$ _____



$m\angle 2 =$ _____