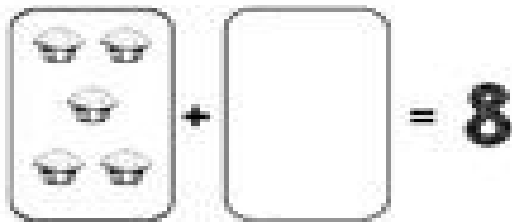


Name: _____

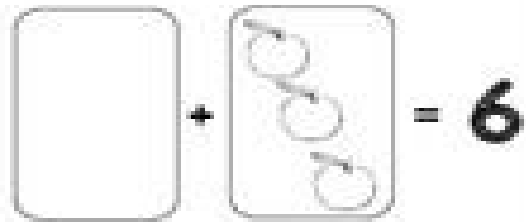
Date: _____

Missing Numbers in Addition

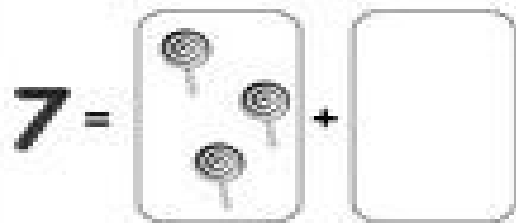
Draw the missing part in the box. Then write the missing number on each line.



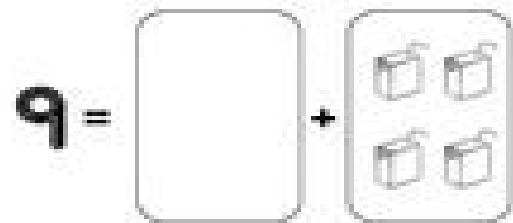
$$5 + \underline{} = 8$$



$$\underline{} + 3 = 6$$



$$7 = 3 + \underline{}$$



$$9 = \underline{} + 4$$