


Name: _____

**3d shape
attributes**




Cube

faces: _____

bases: _____

vertices: _____



Cone

faces: _____

bases: _____

vertices: _____




Sphere

faces: _____

bases: _____

vertices: _____

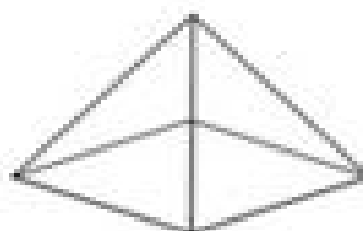


Cylinder

faces: _____

bases: _____

vertices: _____



Pyramid

faces: _____

bases: _____

vertices: _____



**Rectangular
Prism**

faces: _____

bases: _____

vertices: _____