




Name: _____ Date: _____

Money Word Problems

Directions: Solve the following problems. Be sure to label your answers with \$ and ¢ symbols as needed.

<p>1. Ava has these coins:</p>  <p>How many cents does Ava have?</p>	<p>2. You have 6 quarters. You then lose 1 quarter at the bus stop. How much money do you have left?</p>
<p>3. Toby is selling tickets to the school play. Each ticket cost \$3.50. Mrs. Kay buys 1 ticket from Toby. If Mrs. Kay pays with 4 dollar bills, how much change does Toby owe her?</p>	<p>4. Samuel has the following coins:</p>  <p>He gives 1 dime to his little sister. How many cents does Samuel have left?</p>
<p>5. What coin is missing to make the total amount \$6.00?</p> 	<p>6. How much money does a dollar bill, 3 quarters, 2 dimes, and 1 penny equal?</p>