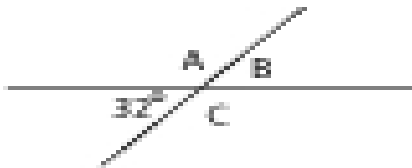




Geometry Worksheet

Name _____

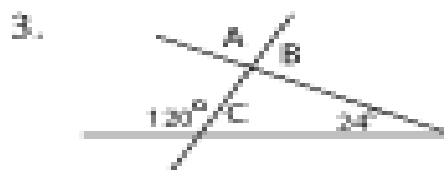
1. Find the angles of A, B, and C.



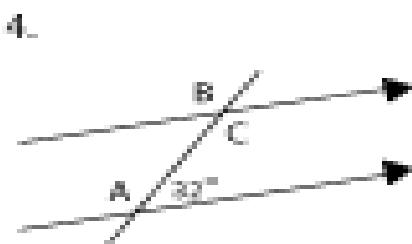
Answer: _____



Answer: _____



Answer: _____



Answer: _____