

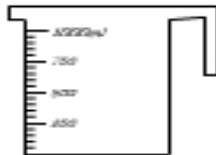
Print

## Volume & Capacity

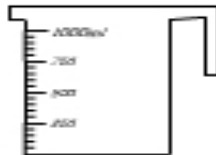
Name: \_\_\_\_\_

Measuring capacity using different units


Colour to fill each measuring jug to the levels indicated below.



1 liter



1 pint

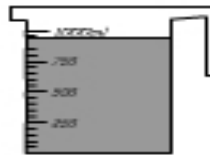


1 quart

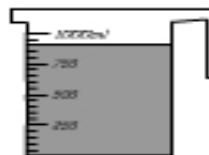


2 pints

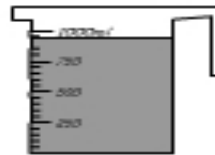
What's the volume of each container.



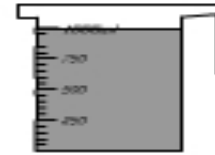
\_\_\_\_\_ pints



\_\_\_\_\_ ml

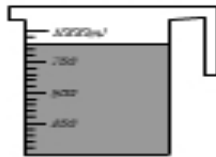


\_\_\_\_\_ quart



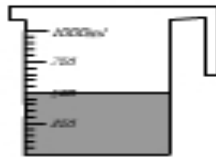
\_\_\_\_\_ liter

How much liquid is needed to fill each jug to 1 litre?



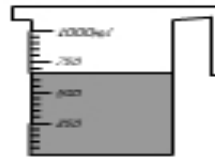
1000 ml -

\_\_\_\_\_ ml



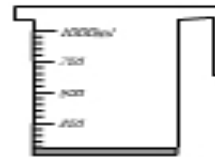
1000 ml -

\_\_\_\_\_ ml



1000 ml -

\_\_\_\_\_ ml



1000 ml -

\_\_\_\_\_ ml



Colour the amount needed to fill the bucket.



www.smartkiddies.com