



Name _____

Adding Hearts!


Directions: Add the two groups to find how many in all.




$$\underline{\quad\quad} + \underline{\quad\quad} = \square$$



$$\underline{\quad\quad} + \underline{\quad\quad} = \square$$



$$\underline{\quad\quad} + \underline{\quad\quad} = \square$$



$$\underline{\quad\quad} + \underline{\quad\quad} = \square$$