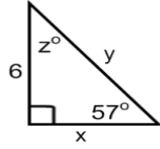
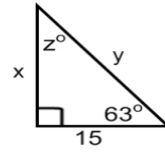


Find the value of each variable to solve the right triangle.

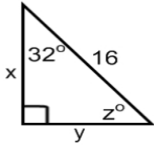
1.  $x =$  \_\_\_\_\_  
 $y =$  \_\_\_\_\_  
 $z =$  \_\_\_\_\_



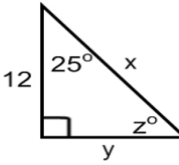
2.  $x =$  \_\_\_\_\_  
 $y =$  \_\_\_\_\_  
 $z =$  \_\_\_\_\_



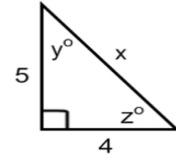
3.  $x =$  \_\_\_\_\_  
 $y =$  \_\_\_\_\_  
 $z =$  \_\_\_\_\_



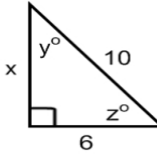
4.  $x =$  \_\_\_\_\_  
 $y =$  \_\_\_\_\_  
 $z =$  \_\_\_\_\_



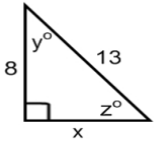
5.  $x =$  \_\_\_\_\_  
 $y =$  \_\_\_\_\_  
 $z =$  \_\_\_\_\_



6.  $x =$  \_\_\_\_\_  
 $y =$  \_\_\_\_\_  
 $z =$  \_\_\_\_\_



7.  $x =$  \_\_\_\_\_  
 $y =$  \_\_\_\_\_  
 $z =$  \_\_\_\_\_



8.  $x =$  \_\_\_\_\_  
 $y =$  \_\_\_\_\_  
 $z =$  \_\_\_\_\_

