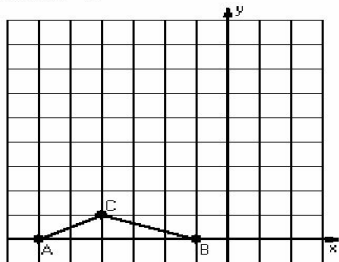


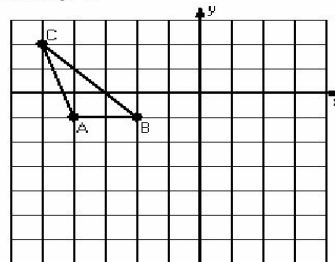
Reflections (E)

Instructions: Draw and label the reflected image for each triangle.
Draw the reflection line.

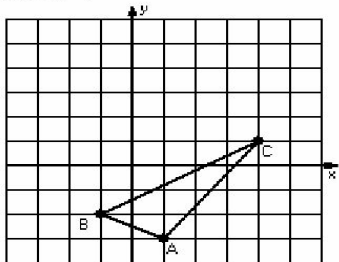
1) Reflection $x = -3$



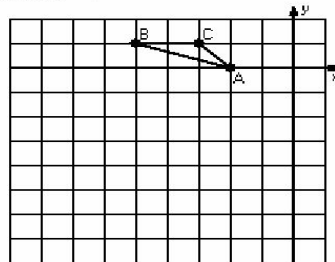
2) Reflection $y = 0$



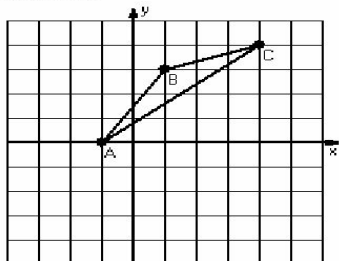
3) Reflection $x = 2$



4) Reflection $y = -1$



5) Reflection $x = 2$



6) Reflection $y = 1$

