


# Pumpkin Math Squares: Addition and Subtraction

Name: \_\_\_\_\_


Date: \_\_\_\_\_



Pumpkin #1 features a 5x5 grid with a black cross pattern. The grid is as follows:

	■		■	
	■		■	
	■		■	


Below the grid are three empty boxes for the answer.



Pumpkin #2 features a 5x5 grid with a black cross pattern. The grid is as follows:

	■		■	
	■		■	
	■		■	

Below the grid are three empty boxes for the answer.



Pumpkin #3 features a 5x5 grid with a black cross pattern. The grid is as follows:

	■		■	
	■		■	
	■		■	

Below the grid are three empty boxes for the answer.