



Name: _____

CCSS Understand that the three digits of a three-digit number represent amounts of hundreds, tens, and ones

Place Value Blocks

 Directions: Circle the part of the place value blocks that show the underlined digit.

1. 346




2. 273



3. 146



4. 433



____ I double checked my work.