

CHECK YOUR PROGRESS
 SCHOOL _____
 NAME _____

DATE _____
 SUBJECT: MATHEMATICS
 CHAPTER _____

DATE _____
 TEACHER _____
 GRADE _____




10) Read the first three lines. Then complete the sentence with the correct names or positions.

Joe is the Champion (Harry is third, and Carl is in fifth position. Peter is fourth position) Joe is between Jim and Harry. Steve is in front of Peter. Bob is behind Carl and in front of Bob. Ted is between Harry and Carl, and Don is behind Bob.

Write the name of the person in the blank space.


	1. _____ is first.		6. _____ is sixth.
	2. _____ is second.		7. _____ is seventh.
	3. Harry is _____.		8. _____ is eighth.
	4. _____ is fourth.		9. Steve is _____.
	5. Carl is _____.		10. _____ is tenth.



11) Write the numbers in figures.


1000 - 500 = 500	11 hundred = 1100	20 hundred = 2000	20 hundred = 2000	Twenty - three = 23
7 hundred = 700	40 thirty = 1200	7 hundred = 700	Eighty - four = 84	Twenty - eight = 28

12) See the first four numbers in the sequence.



1000
1000
1000
1000
1000
1000

13) Circle the number you get when you subtract 100 from 1000.

									
---	---	---	---	---	---	--	---	---	---