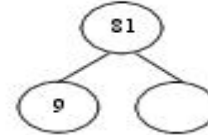
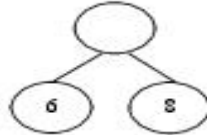
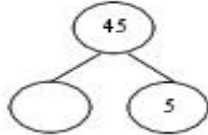


**Review: (3.OA.7) Complete the number bonds.**



**Review: (3.NF.3) Compare. Write < > =**



**Review: (3.OA.9) Identify Arithmetic Patterns.**

Input	Output
4	20
6	30
8	?
10	50

? = \_\_\_\_\_

Rule: \_\_\_\_\_

Input	Output
5	35
12	42
20	?
27	57

? = \_\_\_\_\_

Rule: \_\_\_\_\_

**Review: (3.NF.2) Solve using a number line.**

You have a Hershey's candy bar that you need to cut into 4 equal pieces. Draw a number line to show where you would cut the Hershey's candy bar. Label each piece to represent part of the whole piece of candy bar.