








# Phases of the Moon

Name: \_\_\_\_\_

The moon's appearance changes throughout the month at regular intervals. These are called moon phases. Match the phase of the moon on the left with its correct description on the right.



- new moon
- waxing crescent
- first quarter
- waxing gibbous
- full moon
- waning gibbous
- last quarter
- waning crescent