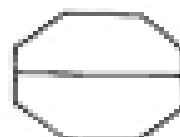






Halves

Color one half ($\frac{1}{2}$) of each shape.



Write a ✓ in the box if $\frac{1}{2}$ the figure is shaded and a ✗ if less than $\frac{1}{2}$ is shaded.



Color one half ($\frac{1}{2}$) of each figure.

