







Name \_\_\_\_\_ Date \_\_\_\_\_

### Tens and Ones #3

Circle the tens. Write the tens and ones in the blanks.

|   |  |
|---|--|
| <p>1. </p> <p>_____ tens, _____ ones</p>   | <p>2. </p> <p>_____ tens, _____ ones</p>   |
| <p>3. </p> <p>_____ tens, _____ ones</p>  | <p>4. </p> <p>_____ tens, _____ ones</p>  |
| <p>5. </p> <p>_____ tens, _____ ones</p> | <p>6. </p> <p>_____ tens, _____ ones</p> |