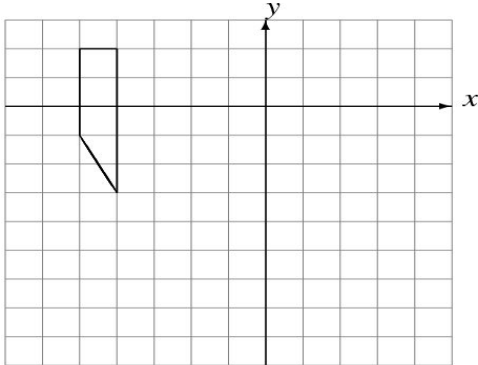


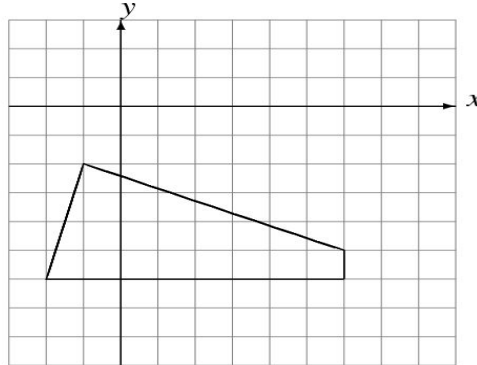
Reflections (J)

Draw the intermediate and reflected images.

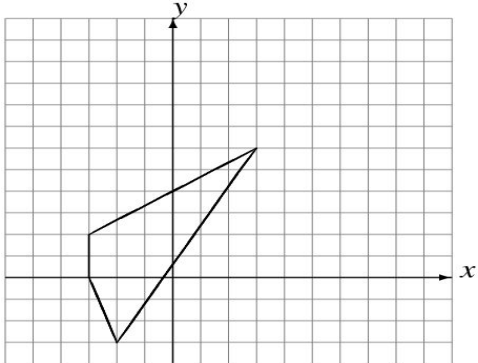
Reflect over $y = -3$.
Reflect over $x = -1$.



Reflect over $y = -3$.
Reflect over $x = 3$.



Reflect over $x = 2$.
Reflect over $y = 4$.



Reflect over $x = -3$.
Reflect over $y = 3$.

