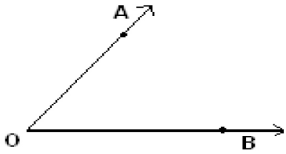
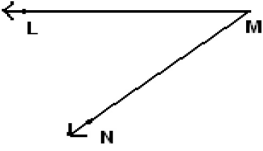

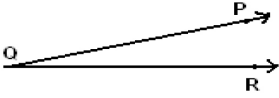

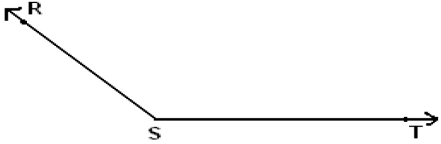
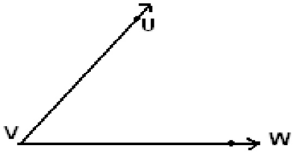
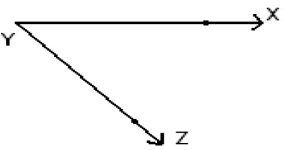


Student Name: \_\_\_\_\_

Score: \_\_\_\_\_

**Vertex and Sides Formed by Angles**

Name the vertex and sides formed by the angles:

|   |  |
|---|--|
|  <p>Vertex: _____ Sides: _____</p>   |  <p>Vertex: _____ Sides: _____</p>   |
|  <p>Vertex: _____ Sides: _____</p>   |  <p>Vertex: _____ Sides: _____</p>   |
|  <p>Vertex: _____ Sides: _____</p> |  <p>Vertex: _____ Sides: _____</p> |
|  <p>Vertex: _____ Sides: _____</p> |  <p>Vertex: _____ Sides: _____</p> |