




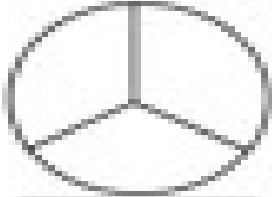





Name: \_\_\_\_\_

## Fractions - Halves and Thirds

Directions: Write the word **halves** or **thirds** under each picture to tell if the shape is split into halves or thirds.

|  |  |  |
|--|--|--|
| <br>_____<br>.....<br>_____   | <br>_____<br>.....<br>_____   | <br>_____<br>.....<br>_____   |
| <br>_____<br>.....<br>_____  | <br>_____<br>.....<br>_____  | <br>_____<br>.....<br>_____  |
| <br>_____<br>.....<br>_____ | <br>_____<br>.....<br>_____ | <br>_____<br>.....<br>_____ |