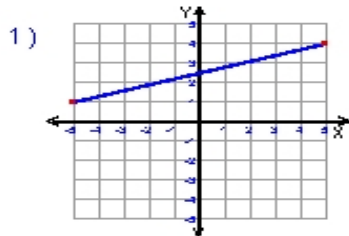


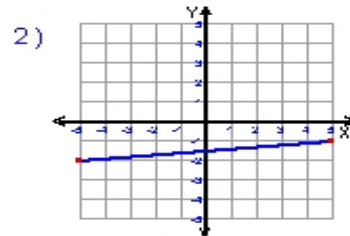
Name : \_\_\_\_\_ Score : \_\_\_\_\_

Teacher : \_\_\_\_\_ Date : \_\_\_\_\_

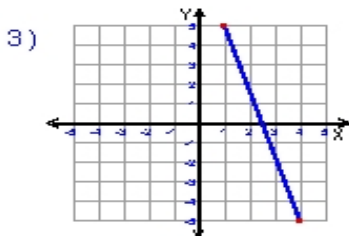
**Find the Slope of Each Line**



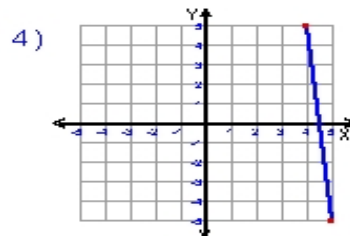
slope = \_\_\_\_\_



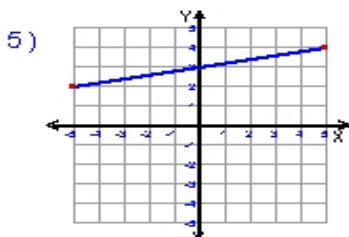
slope = \_\_\_\_\_



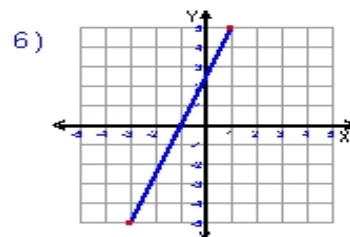
slope = \_\_\_\_\_



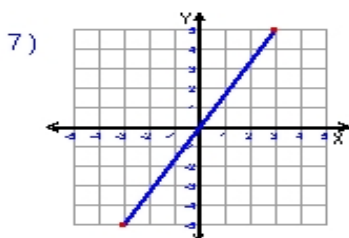
slope = \_\_\_\_\_



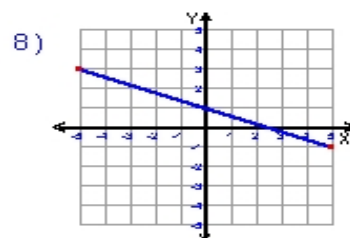
slope = \_\_\_\_\_



slope = \_\_\_\_\_



slope = \_\_\_\_\_



slope = \_\_\_\_\_

