



Name: _____

Compare each set of fraction ice cream cones using the <, >, and = symbols.

1.




2.



3.




4.




5.



6.




7.




8.



9.



10.



11.



12.

