

Area of a Triangle

$$\text{Area of a Triangle} = \frac{\text{Base} \times \text{Height}}{2}$$

Example:



$$\text{Area} = \frac{4 \times 6}{2}$$

$$\text{Area} = \frac{24}{2}$$

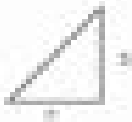
$$\text{Area} = 12$$

Find the area of the triangles below.

1



2



3



4



5




6



7




8



9



10



11



12

