


### PENNY, NICKEL, AND DIME

Name: \_\_\_\_\_ Date: \_\_\_\_\_

Write how much money in \_\_\_\_\_

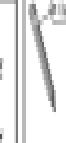
Circle the amount of money for \_\_\_\_\_



1c  
5c  
10c


Draw the fewest number of coins you can use to buy each item.

Use **P** for pennies and **N** for nickels.



5c  
10c  
1c

Write the amount of money for \_\_\_\_\_



5c  
10c  
1c


Circle the coins you need to buy the \_\_\_\_\_

### PENNY, NICKEL, DIME, AND QUARTER

Name: \_\_\_\_\_ Date: \_\_\_\_\_

Write how much money in \_\_\_\_\_


Circle the amount of money for \_\_\_\_\_



1c  
5c  
10c  
25c


Draw the fewest number of coins you can use to buy each item.

Use **P** for pennies, **N** for nickels, **D** for dimes, and **Q** for quarters.



5c  
10c  
1c

Write the amount of money for \_\_\_\_\_



5c  
10c  
1c

Circle the coins you need to buy the \_\_\_\_\_