

**Multiplication - Parallelograms**


Name \_\_\_\_\_

**Area of a Parallelogram**


Date \_\_\_\_\_ Period \_\_\_\_\_

**Find the area of each parallelogram. Round to the nearest tenth.**


11




12




13



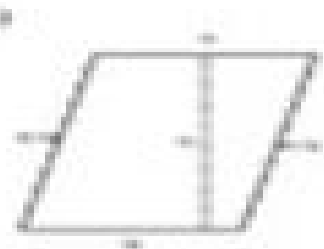
14




15



16



17



18



19

