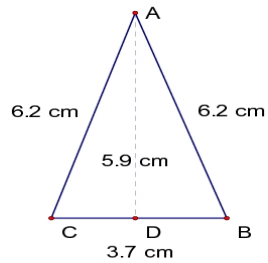
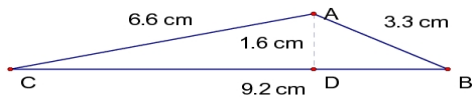
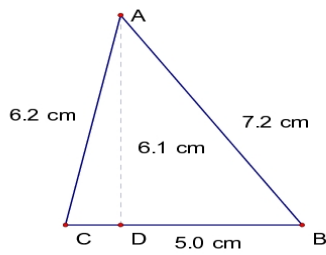
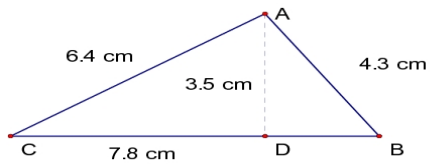


Perimeter and Area of Triangles (A)

Instructions: Calculate the perimeter and area for each triangle below.



Free Math Worksheets at <http://www.math-drills.com>