

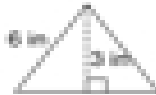
Name \_\_\_\_\_

## Area of Triangles

Find the area of triangles.

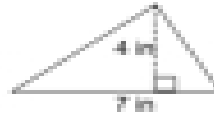
Use the measurements to find the area of each figure.

1.



Ans \_\_\_\_\_

2.



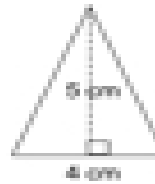
Ans \_\_\_\_\_

3.



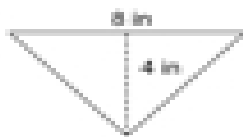
Ans \_\_\_\_\_

4.



Ans \_\_\_\_\_

5.



Ans \_\_\_\_\_

6.



Ans \_\_\_\_\_