


Directions: Use a protractor to measure the angles shown for each example. Write whether the angle is acute, right, obtuse, or straight.

1.




\_\_\_\_\_  
\_\_\_\_\_

2.



\_\_\_\_\_  
\_\_\_\_\_

3.




\_\_\_\_\_  
\_\_\_\_\_

4.




\_\_\_\_\_  
\_\_\_\_\_

5.




\_\_\_\_\_  
\_\_\_\_\_

6.




\_\_\_\_\_  
\_\_\_\_\_

7.



\_\_\_\_\_  
\_\_\_\_\_

8.



\_\_\_\_\_  
\_\_\_\_\_

9.



\_\_\_\_\_  
\_\_\_\_\_