







Name: \_\_\_\_\_

Wednesday

**Math Practice: Recognize and draw shapes (2.G.1)**

**Name the shape.**

 _____ Number of sides: _____ Number of angles: _____ Objects I have seen:	 _____ Number of sides: _____ Number of angles: _____ Objects I have seen:	 _____ Number of sides: _____ Number of angles: _____ Objects I have seen:
 _____ Number of sides: _____ Number of angles: _____ Objects I have seen:	 _____ Number of sides: _____ Number of angles: _____ Objects I have seen:	 _____ Number of sides: _____ Number of angles: _____ Objects I have seen: